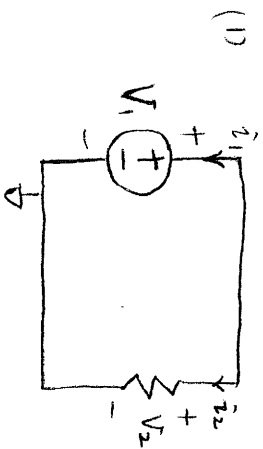


6.002 Pset 1 Solution

1. A&L P1.3



(2) Current in the bulb:

$$i_2 = \frac{V_2}{R} = \frac{7.2}{100} = 0.072 \text{ A}$$

Power dissipation in the bulb:

$$P_2 = V_2 i_2 = 7.2 \times 0.072 = 0.52 \text{ W}$$

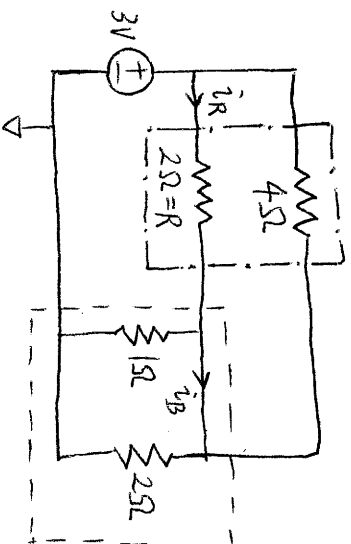
(3) Power into the battery

$$P_1 = V_1 i_1 = V_2 \cdot (-i_2) = -0.52 \text{ W}$$

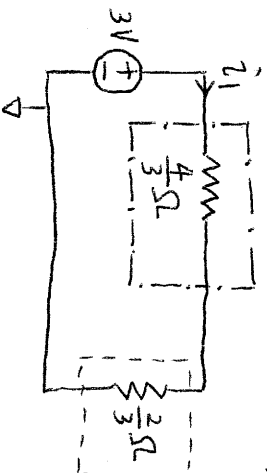
(4) $P_1 + P_2 = 0.52 - 0.52 = 0$ W

(5) $t = \frac{W}{P_2} = \frac{10000}{0.52} = 1.9 \times 10^5$ s

2. A&L P2.9



↓ parallel simplification



Total current from the battery (see above)

$$i_1 = \frac{3}{\frac{4}{3} + \frac{2}{3}} = 1.5 \text{ A}$$

Current through R (see above)

$$i_R = \frac{4}{2+4} \times 1.5 = 1 \text{ A}$$

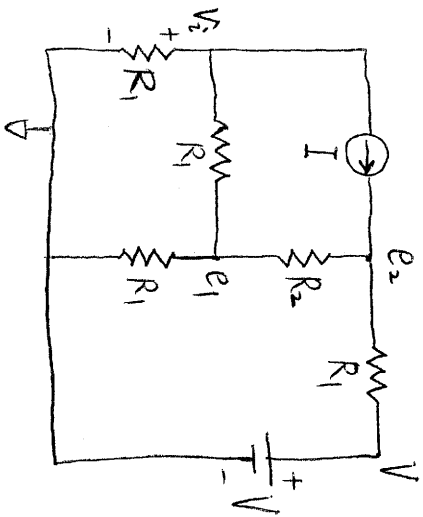
Power dissipation in R:

$$P_R = i_R^2 \cdot R = 2 \text{ W}$$

(Note: It's a balanced bridge, so $i_B = 0$.)

$$i_R = \frac{3}{2+1} = 1 \text{ A}$$

3. A & L P 3.6



Node method:

@ V_i :

$$\frac{V_i}{R_1} + \frac{V_i - e_1}{R_1} + I = 0$$

@ e_1 :

$$\frac{e_1 - V_i}{R_1} + \frac{e_1 - e_2}{R_2} + \frac{e_1}{R_1} = 0$$

@ e_2 :

$$\frac{e_2 - e_1}{R_2} + \frac{e_2 - V}{R_1} - I = 0$$

$$\begin{bmatrix} \frac{2}{R_1} & -\frac{1}{R_1} & 0 \\ -\frac{1}{R_1} & \frac{2}{R_1} + \frac{1}{R_2} & -\frac{1}{R_2} \\ 0 & -\frac{1}{R_2} & \frac{1}{R_1} + \frac{1}{R_2} \end{bmatrix} \begin{bmatrix} V_i \\ e_1 \\ e_2 \end{bmatrix} = \begin{bmatrix} -I \\ 0 \\ I + \frac{V}{R_1} \end{bmatrix}$$

$$\therefore V_i = \frac{V - 2I(R_1 + R_2)}{5 + \frac{3R_2}{R_1}} = \frac{2 - 2 \times 3 \times 5}{5 + \frac{3}{2}}$$

$$= -2.95 \text{ V}$$

~~~~~

$$(e_1 = 2V_i + IR_1 = 0.105 \text{ V})$$

$$e_2 = V + IR_1 + V_i - 2e_1 = 4.84 \text{ V}$$

### 4. iLab

(1) Measurements:  $i_1, V_2$

We also know  $V_1$ , as a known voltage source  $i_2$  is always zero.

A possible measurement is:

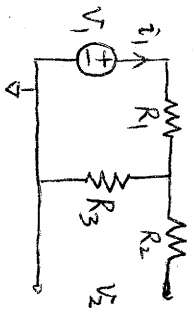
$$V_1 = 1 \text{ V}, \quad V_2 = 0.66 \text{ V}, \quad i_1 = 34 \mu\text{A}$$

Therefore,

$$\frac{V_2}{V_1} = \frac{R_3}{R_1 + R_3} = 0.66$$

$$\frac{V_1}{i_1} = R_1 + R_3 = 29 \text{ k}\Omega$$

$$\begin{cases} R_3 = 19 \text{ k}\Omega \\ R_1 = 10 \text{ k}\Omega \end{cases}$$



(2) measurements:  $i_1, i_2$

We also know  $V_1$ .

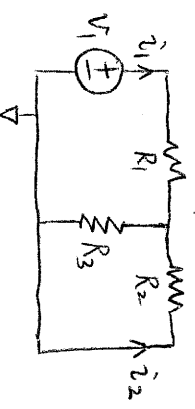
$V_2$  is always zero.

A possible measurement is.

$$V_1 = 1 \text{ V}, \quad i_1 = 42 \mu\text{A}, \quad i_2 = -12 \mu\text{A}$$

Therefore

$$\frac{V_1}{i_1} = R_1 + \frac{R_2 R_3}{R_2 + R_3} = 24 \text{ k}\Omega$$



$$\left| \frac{i_2}{i_1} \right| = \frac{R_3}{R_2 + R_3} = 0.29$$

(3) measurements:  $V_1$ ,  $V_2$ .

We also know  $i_1$ .

$i_2$  is always zero.

A possible measurement is,

$$i_1 = 100 \mu\text{A}, \quad V_1 = 2.95 \text{ V}, \quad V_2 = 1.96 \text{ V}$$

Therefore, similar to (1).

$$\frac{V_2}{V_1} = \frac{R_3}{R_1 + R_3} = 0.66$$

$$\frac{V_1}{i_1} = R_1 + R_3 = 30 \text{ k}\Omega.$$

$$\therefore R_3 = 20 \text{ k}\Omega$$

$$R_1 = 10 \text{ k}\Omega$$

(4) measurements:  $V_1$ ,  $i_2$ .

We also know  $i_1$ .

$V_2$  is always zero.

A possible measurement is,

$$i_1 = 100 \mu\text{A}, \quad V_1 = 2.39 \text{ V}, \quad i_2 = -28.5 \mu\text{A}.$$

Therefore, similar to (2)

$$\frac{V_1}{i_1} = R_1 + \frac{R_2 R_3}{R_2 + R_3} = 24 \text{ k}\Omega$$

$$\left| \frac{i_2}{i_1} \right| = \frac{R_3}{R_2 + R_3} = 0.29$$

(5) ① Three measurements are required

to determine three unknown resistor values.

② However, we can do multiple measurement in one experiment. Eg. in (1), we can determine both  $R_1$  and  $R_3$ .

③ Within experiments (1) ~ (4), we need at least two of them to determine  $R_1$ ,  $R_2$  and  $R_3$ .

④ However, if we are allowed to design any experiment, it's possible to do all the three measurements in one experiment:

$\left\{ \begin{array}{l} V_1 = 1 \text{ V constant voltage source} \\ i_2 = 0 \sim 10 \mu\text{A variable current source} \end{array} \right.$

Record  $V_1$ ,  $i_1$ ,  $V_2$ ,  $i_2$  for all steps.

(6) From experiment (1) & (2), we know  $R_1 = 10 \text{ k}\Omega$ ,  $R_3 = 19 \text{ k}\Omega$ .

$$\frac{R_3}{R_2 + R_3} = 0.29$$

Therefore,

$$\left\{ \begin{array}{l} R_1 = 10 \text{ k}\Omega, \\ R_2 = 47 \text{ k}\Omega \\ R_3 = 19 \text{ k}\Omega \end{array} \right.$$